

# 香港兒童數學大獎賽

數學比賽  
K2參考題目

Q3. 好兒童教育 Good Children Education

哪條尾巴是最短?  
Which tail is the shortest?


A. B. C. D.



Q1.


圖中有多少隻兔子?  
How many rabbits are there in the picture?

A) 4隻/pcs  
B) 5隻/pcs  
C) 6隻/pcs  
D) 7隻/pcs



好兒童教育 Good Children Education

Q4.



A) 6  
B) 7  
C) 8  
D) 9

好兒童教育 Good Children Education

Q2.

中間圓形內應填哪個數字?  
Which number should be filled in the middle circle?

7   ?   5

A) 4  
B) 7  
C) 6  
D) 8

好兒童教育 Good Children Education

Q5. 好兒童教育 Good Children Education

以下哪一組動物有最多數量?  
Which of the following groups of animals has the greatest number?

A.  C. 


B.  D. 




Q3.





$7 + \blacklozenge = 10, \blacklozenge = ?$


A) 3  
B) 7  
C) 10  
D) 13



Q1. ? 水果是什麼?  
▶ What is fruit in the ? ?



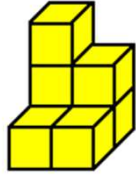

A)       B)   
C)       D) 




Q4.

下圖共有多少個正方體?  
How many cubes are there in the picture below?


A) 5個/pcs  
B) 6個/pcs  
C) 7個/pcs  
D) 8個/pcs

Q2.



A) 2  
B) 4  
C) 5  
D) 7



Q5.

小象和狐狸之間有多少隻動物?  
How many animals are there between the baby elephant and the fox?



A) 7隻  
B) 6隻  
C) 5隻  
D) 4隻

